

$13 + 34$

$42 + 23$

$36 + 10$

Name: _____

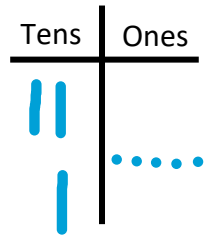
Date: _____

Double-Digit Addition Part 1

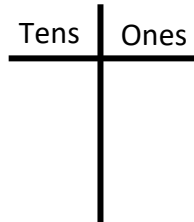
Use the T-chart to complete the following math problems:

Example:

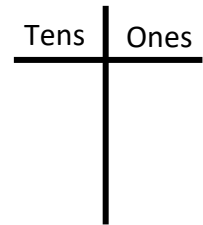
$$\begin{array}{r} 20 \\ + 15 \\ \hline 35 \end{array}$$



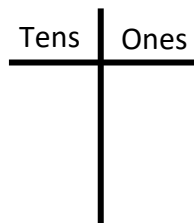
$$\begin{array}{r} 2 \\ + 37 \\ \hline \end{array}$$



$$\begin{array}{r} 42 \\ + 20 \\ \hline \end{array}$$



$$\begin{array}{r} 31 \\ + 8 \\ \hline \end{array}$$



$$\begin{array}{r} 25 \\ + 30 \\ \hline \end{array}$$

